

MUSS PASS DRIVING SCHOOL

Theory Answer sheet

- 1. You are turning right at the Vigie Roundabout
What should you do just before leaving the roundabout?**
(b)Take a 'lifesaver ' glance over your left shoulder
- 2. Someone is standing on the pavement,
Waiting to cross at the pedestrian's crossing.
What should you do?**
(b)Stop, and wait patiently as they cross
- 3. You are reversing your vehicle into a side road. When the greatest hazard to passing traffic occur?**
(c)When the front of your vehicle swings Out
- 4. Under what condition, may you enter a box junction?**
(a)When your exit road is clear
- 5. In heavy highway traffic, you are being followed closely by the vehicle behind.
How can you lower the risk on an accident?**
(b)Increase your speed from the vehicle In front
- 6. You are turning left on a slippery road
what should you do if the back of you Vehicle slides to the right?**
(b)Steer carefully to the right
- 7. What is the national speed limit for cars on the highways of St. Lucia?**
(b)64 Kph
- 8. You are driving and you double the speed of you vehicle. In doing so, your braking distance in an emergency will.....**
(c)Quadruple
- 9. Which one of the following can affect you reaction time in an emergency?**
(a)The state of your health
- 10. What is the minimum time gap, one should leave between them and the vehicle ahead if the road is wet?**
(a)4 seconds

" Where Safety Comes First "

MUSS PASS DRIVING SCHOOL

11. Traffic signs have been established on St. Lucia's roads for some time now. The use of particular signs is dependent upon a system. Which of the following correctly summarizes the traffic signs?
(c) Circle signs give orders, triangle signs Warn and rectangle signs inform

12. You are travelling 40Mph (64Kph) on a dry road in a well maintained vehicle. You are alert and need to brake in an emergency. You are able to stop in less than.....
(c)36 meters (120 feet)

13. You may park on the right-hand side of the road at night.....
(d)On a one way street

14. You are driving a car with automatic transmission and you approach a steep downhill gradient. What should you do?
(b)Leave the selector in drive and apply the footbrake

15. While driving along an open road, you notice that the temperature gauge of your vehicle is recording a rapid rise in temperature. What is the most likely cause of this?
(d)The fan belt has been broken

16. Signals are normally give by direction, indicators and.....
(b)Brake lights

17. Which sign symbolizes "SPEED BUMPS"?



18. Which sign means "STRAIGHT AHEAD"?



19. Which sign mean "TWO WAY TRAFFIC CROSSES A ONE -WAY STREET"?



20. Which signs mean "HUMP BACK BRIDGE"?



21. Which sign means "NO MOTOR VEHICLE"?



22. Identify the "ROUNABOUT" symbol.



23. Identify the "CROSSROADS" symbol



24. Which sign means "UNEVEN ROADS"?



25. You are driving in town, there is a bus parked on the opposite side of the road. Why should you be careful?
(a) Pedestrians may come from behind the bus

26. You are dazzled at night by a vehicle behind you, what should you do?
(b)Set your mirror to anti-dazzle

"Where Safety Comes First"

MUSS PASS DRIVING SCHOOL

27. You will use more gas if your tyres are.....
(b)Under Inflated
28. When should you especially check the engine oil level?
(d)Before a long journey
29. When must you use dipped headlights during the day?
(a)In poor visibility
30. When driving towards a left-hand bend, What dangers should you be aware of?
(c)Pedestrians walking towards you
31. You are turning left into a side road, what hazards should you be especially aware of?
(d)Pedestrians
32. You should never attempt to overtake a cyclist.....
(d)Just before you turn left
33. What age group of driver, is most likely to be involved in a road accident?
(a)Men-17 to 25 years old
34. You are driving on a main road; you intend to turn right into a side road. What should you do just before turning?
(a)Check for traffic overtaking on your right
35. You have just passed your driving test. How could you decrease your risk of an accident on the road?
(b)By taking further training
36. There is a backhoe ahead of you. You wish to overtake but you are NOT sure if it is safe to do so. What should you do?
(c)Not overtake if you are in doubt
37. You arrive at the scene of 'Motor Cycle' accident. The rider is injured. When should the rider's helmet be removed?
(b)Only when it is essential
38. You are finding it difficult to find a parking space in Castries. You can see there is a space on the pedestrians crossing. Can you park there?
(d)NO, not in any circumstances
39. Identify the sign which symbolizes "T-JUNCTION" 
40. Identify the sign which symbolizes "PEDESTRIAN CROSSING" 

"When Safety Comes First"

MUSS PASS DRIVING SCHOOL

41. Which sign means "TUNNEL"? 
42. You are turning left from a main road into a side road, people are already crossing the road into which you are turning. What should you do?
(a) Wait and allow them to cross
43. You are driving along a wet road. How can you tell if your vehicle is "aqua-planning"?
(b) The steering wheel will feel very light
44. You must not reverse.....
(c) For longer than necessary
45. When going straight ahead at a roundabout, you should....
(c) Indicate left before leaving the roundabout
46. Anti-lock brakes prevent wheels from locking. This means that the tyres are less likely to.....
(a) Skid
47. You have driven through a flood, What is the first thing you should do?
(b) Test your brakes
48. You have been overtaken by a Motorcyclist, who is cutting in sharply. What should you do?
(d) Keep a safe gap
49. You want to reverse into a side road and you are not sure that the area behind your car is clear. What should you do?
(b) Get out and check
50. You are following a learner who stalls at a junction. What is the wisest thing to do?
(a) Be patient as you expect them to make mistakes
51. Speed bumps are used to.....
(d) Slow down traffic
52. While driving, you intend to turn left into a minor road. What should you do on the approach?
(c) Keep well to the left of the road
53. What does 'Red Traffic Light' mean?
(a) You must stop and wait behind the stop line

MUSS PASS DRIVING SCHOOL

54. At an accident, you suspect a casualty has back injuries. The area is safe. What should you do?

(c) Not move them

55. Identify the "NO ENTRY" sign



56. Identify the "TURN LEFT AHEAD" sign



57. Identify the "NO WAITING" sign



58. Which sign symbolizes "NATIONAL SPEED LIMIT APPLIES"?



59. Which sign symbolizes "ONE WAY STREET"?



60. You are in a one-way street and want to turn right. How should you position yourself?

(b) In the right hand lane

61. What will reduce the risk of neck injury resulting from collision?

(b) A properly adjusted head restraint

62. It is essential that tyre pressure be checked regularly. When should this be done?

(a) When tyres are cold

63. Skidding is mainly caused by.....

(d) The driver

64. You have just gone through deep waters, What should you do to dry off your brakes?

(c) Go slowly while gently applying the brakes

65. You intend to turn left at the traffic lights. What should you do just before turning?

(a) Check for bicycles on your left

66. You are following a vehicle at a safe distance on a wet road. Another vehicle overtakes you and pulls into the gap you left. What should you do?

(d) Drop back to regain a safe distance

67. You are driving at night. Another vehicle with full beam headlights is overtaking you. At what point should you dim your lights?




(b) Before the vehicle starts to pass you

68. Who has priority when traffic lights are not working?

(d) Nobody

"Where Safety Comes First"

MUSS PASS DRIVING SCHOOL

69. At an accident, a casualty is unconscious but still breathing, You should only move them if....
(a)There is further danger
70. What is the most likely cause of high fuel consumption?
(b)Harsh braking and acceleration
71. You are driving at night. A slower moving Vehicle ahead has been signaling right for Some time. What should you do?
(c)Wait for the signal to be cancelled before overtaking
72. When may you reverse from a minor road into a major road?
(a)Not at any time
73. Which sign symbolizes "ROAD NARROWS"? 
74. Which sign symbolizes "SLIPPERY ROAD"? 
75. Which sign symbolizes "DOUBLE BEND AHEAD"? 
76. "Where Safety Comes First"
You stop for pedestrians waiting to cross at a crossing. What should one do if they do not start crossing immediately?
(b)Be patient and wait
77. Why must new petrol engine cars be fitted with catalytic converters?
(b)To reduce harmful exhaust emissions
78. What can cause heavy steering?
(c)Under-inflated tyres
79. What is the first thing you do, if your vehicle pulls to one side while braking?
(a)Consult your garage as soon as possible
80. Turning the steering wheel while the vehicle is stationary, can cause damage to the:
(b)Steering/tyres
81. Unbalanced wheel on a car may cause:
(c)The steering to pull to one side
82. If you service your own vehicle, how should you get rid of the old engine Oil?
(b)Take it to a local waste authority site

MUSS PASS DRIVING SCHOOL

83. What is the shortest stopping distance at 70 mph?
(c)315 feet (96 meters)

90. Identify the sign which symbolizes
"NO STOPPING"?



91. Which sign means "NO U-TURN"?



84. The main benefit of having four-wheeled drive is to:
(b)Improve road holding

92. Which sign symbolizes "NO CYCLING"?



93. When being followed by an ambulance showing a flashing blue beacon. You Should.....
(b)Pull over as soon as safely possible to let it pass

85. How can you use the engine of your vehicle as a brake?
(b)By changing to lower gear

94. What should you use your horn for?
(d)To alert others of your presence

86. Vehicles fitted with anti-lock brakes.....
(a)Are impossible to skid

95. You wish to turn right ahead. Why should You take up the correction position in good time?
(d)To help other road users know what you intend to do

87. How does alcohol affect you?
(c)It reduces your concentration

88. A driver pulls out of a side road and ends up in front of you. You have to brake hard to avoid collision. What would the next best thing to do?



(b)Ignore the error and stay calm

96. A bus has stopped at a bus stop ahead of you. It's right-hand indicator is flashing. What should you do?

(c)Slow down and give way if it safe to do so


89. Who is especially in danger of not being seen as you reverse your car?
(b)Children

MUSS PASS DRIVING SCHOOL

97. You are travelling at the legal speed limit. A vehicle comes up quickly behind, flashing it's headlights. You should?
(a) Allow the vehicle to overtake
98. You should ONLY flash your headlights to other road users.....
(a) To let them know that you are there
99. You should leave at least a two-second gap between your vehicle and the one in front when conditions are.....
(d) Good
100. You are driving behind a large good vehicle. It signals left but steers to the right. What should you do?
(b) Slow down and let the vehicle turn
101. You are driving in traffic at the speed limit for the road. The driver behind is trying to overtake. What should you do?
(b) Keep a steady course and allow the driver behind to overtake
102. You are driving at night on an unlit road behind another vehicle. You should.....
(a) Use dipped beam headlights
103. You are driving along a country road. A horse and rider is approaching. What should you do?
(b) Drive slowly pass
(c) Give plenty of room
104. To avoid spillage after refueling you should make sure that.....
(c) Your filler cap is securely fastened
105. A vehicle pulls out in front of you at a junction. What should you do?
(d) Slow down and be ready to stop
106. You are following a lorry. You should keep well back from it to.....
(d) Give you a good view of the road ahead
107. Identify the sign which symbolizes "MAXIMUM SPEED" 
108. Identify the sign which symbolizes "NO VEHICLES OVER WIDTH SHOW" 

"Where Safety Comes First"

MUSS PASS DRIVING SCHOOL

109. Identify the sign which symbolizes "GO" 
110. You are leaving your vehicle parked on a road. At what point may you leave the engine running?
(c) Not on any occasion
111. On your vehicle, where will you find a Catalytic converter?
(a) On the exhaust system
112. You want to turn right from a main road into a side road, what must you do before turning?
(d) Check for traffic overtaking on the right
113. You are waiting to emerge from a minor road. A large vehicle is approaching from the right. You have time to turn, but you should wait. Why?
(b) The large vehicle can easily hide an overtaking vehicle
114. Why must you not wave people across a pedestrian crossing?
(d) There may be another vehicle coming
115. Why should one keep well back, before overtaking a large vehicle?
(c) To get the best view of the road ahead
116. The main reason why motorcyclists should wear bright clothing is because.....
(c) Drivers often do not see them
117. You are on the highway at night, you must have your headlights switched on unless.....
(a) Your vehicle is broken down
118. An accident has just happened, and an injured person is lying in the busy road. What is the first thing you should do to help?
(a) Warn other traffic
119. You are waiting at a T-Junction. What should you do if a vehicle is coming down from the right with the left signal flashing?
(d) Wait until the vehicle starts to turn in
120. Where may you overtake on a one-way street?
(c) Either on the right or the left

"Where Safety Comes First"

MUSS PASS DRIVING SCHOOL

121. **When turning your vehicle in the road Using forward and reverse gears, you Should signal.....**
(a) If doing so will help other road users
122. **The highway code advised never to Reverse from a side road into a main road. It also adds that you must not reverse your vehicle.....**
(a) Any further than is absolutely necessary
123. **Reversing into a side road in order to proceed in the opposite direction is not a suitable method to use when in a.....**
(b) Narrow or busy roads
124. **At what point should a driver reinforce Indicator signals, by giving arm signals?**
(b) When doing so would help others
125. **Areas of white diagonal stripes painted on the road are to.....**
(d) Separate traffic streams liable to be a danger to each other or to protect traffic turning right
126. **Prohibitory traffic signs tell a driver what he.....**
(c) Must not do
127. **A permit to learn to drive a motor vehicle is normally valid.....**
(b) For 6 months
128. **When negotiating a road junction, What must you do when there is a STOP sign?**
(c) Approach with the intention of stopping
129. **Driving requires good, safe and correct braking; when braking to a normal stop, how should you apply you brakes?**
(c) Progressively easing off the pressure as you come to a smooth stop
130. **When you stop in an emergency, it is.....**
(b) Not necessary to check the mirror before braking

"Where Safety Comes First"

MUSS PASS DRIVING SCHOOL

131. Before moving off from a parked position At the side of the road, you should Carry out a sequence of actions. Which One of the following sequence is correct?
(d)Signal, look around and then move off
132. When you approach a junction and intend to stop, you should depress the.....
(b)Foot brake and then depress the clutch
133. You are traveling on a wet road in a well maintained vehicle at 40 mph. You have to brake in an emergency; you are unlikely to stop less than.....
(c)240 feet
134. A pedestrian is bit by a car, which is travelling at 40 mph. What will be condition of the pedestrian?
(a)He / she will probably be killed
135. What style of driving causes Increased risk to everyone?
(a)Competitive
136. Which two are badly affected if the tyres are under-inflated?
(a)Braking
(c)Steering
137. The purpose of a catalytic converter is to reduce.....
(d)Toxic exhaust gases
138. How should you dispose of a used battery?
(d)Take it to a local authority site
(f)Take it to a garage
139. The fluid level in your battery is low. What should you top it up with?
(b)Distilled water
140. Your anti- lock brakes warning light stays on. You should.....
(a)Have the brakes checked immediately
141. It is illegal to drive with tyres that
(d)Have a large deep cut in the side wall
142. You are carrying two 13 year old children and their parents in your car. Who is responsible for seeing that the children wear seat belts?
(a)You the driver
- "Where Safety Comes First"

MUSS PASS DRIVING SCHOOL

143. Which three does the law require you to keep in good condition?

- (a) Headlights
- (b) Windscreen
- (e) Seat belts

144. Unbalanced wheels on a car, may cause....

- (c) The steering to vibrate

145. How can you reduce the chance of your car being broken into when leaving unattended?

- (c) Take all valuables with you

146. Identify the sign which symbolizes "GIVE WAY"



147. What does a circular sign with a blue background do?

- (c) Give an instruction

148. Which four of these would be indicated by A triangular road sign?

- (b) Road narrows
- (c) Children crossing
- (d) T-Junction

149. When leaving your vehicle parked And unattended you should.....

- (a) Remove the key and lock it

150. Before starting a journey it is wise to plan your route. How can you do this?

- (c) Look at a map

151. Planning your journey to avoid busy times has a number of advantages. One of these is.....

- (d) You will have a more pleasant journey

152. It can help to plan your route before starting a journey. Why should you plan an alternative route?

- (c) Your original route may be blocked

153. You are making an appointment and will have to travel a long distance. You should....

- (b) Allow plenty of time for journey

154. How can missing out on some gear changes save fuel?

- (b) By reducing the amount of time you are accelerating

155. You are parked at the side of the road. You will be waiting for some time for a passenger What should you do?

- (b) Switch off the engine



"Where Safety Comes First"

MUSS PASS DRIVING SCHOOL

156. In windy conditions, you need to take extra care when.....
(c) Passing pedal cyclist
157. You are following a vehicle at a safe Distance on a wet road. Another driver Overtakes you and pulls into the gap you have left. What should you do?
(d) Drop back to regain a safe distance
158. When approaching a right-hand bend you Should keep well to the left. Why is this?
(b) To improve your view of the road
159. You are on a fast, open road in good Conditions. For safety , the distance Between you and the vehicle in front Should be.....
(c) a two-second time gap
160. Travelling for long distance in neutral (known as coasting).....
(b) Reduces the driver's control
161. As a provisional licence holder, you must not drive a motor car.....
(d) On your own
(e) On the motorway
162. You are invited to a bar for a few drinks. You know that you will have to drive In the evening. What is your best course of action?
(c) Not drink any alcohol at all
163. You are about to drive home. You feel very tired and have a severe headache. What should you do?
(b) Wait until you are fit and well before driving
164. Your motorway journey seems boring and you feel drowsy. What should you do?
(a) Open a window and stop as soon as it's safe and legal
165. Driving long Distance can be tiring. You can prevent this by.....
(a) Ensuring plenty of refreshment breaks
(d) Opening a window for some fresh air
(e) Stopping every so often for a walk
166. You are driving along a built-up area. A driver on the left is reversing from a driveway. What should you do?
(d) Sound your horn and be prepared to stop

"Where Safety Comes First"

MUSS PASS DRIVING SCHOOL

167. You have been involved in an argument before starting your journey. This has made you feel angry. What should you do?
(c)Calm down before you start to drive
168. Your doctor has given you a course medicine. Why should you ask about its effect on you?
(d)Some types of medicines can cause your Reactions to slow down
169. You find that you need glasses to read vehicle number plates at the required distance. When must you wear them?
(c)At all times when driving
170. When should you use hazard warning lights?
(c)When your vehicle has broken down and is causing an obstruction
171. Overtaking is the major cause of collisions. In which three of these situations should you Not overtake
(b)If you are turning left shortly afterwards
(c)When you are approaching a junction
(d)When your view ahead is blocked
172. You are turning at a junction. Pedestrians have started to cross the road. You should.....
(a)Give way to them
173. How will a school crossing warden signal you to stop?
(b)By displaying a stop sign
174. You see a pedestrian with a white stick and a red band. This means that the person is....
(b)Deaf and blind
175. What action would you take when elderly people are crossing the road?
(d)Be patient and allow them to cross in their own time
176. Which sign means "WILD ANIMALS"? 
177. Identify the sign which means "QUAYSIDE OR RIVER BANK" 

"Where Safety Comes First"

MUSS PASS DRIVING SCHOOL

178. You are about to go down a steep Hill. To control the speed of your Vehicle you should.....
(b) Select a low gear and use the brakes carefully
179. You wish to park facing downhill. Which two of the following should You do?
(c) Turn the steering wheel towards the kerb
(e) Put the handbrake on firmly
180. When driving in fog, which three of these are correct?
(b) Use dipped headlights
(d) Allow more time for your journey
(f) Slow down
181. You are driving in heavy rain. Your Steering suddenly becomes very light. What should you do?
(c) Ease off the accelerator
182. You are driving along a wet road. How can you tell if your vehicle's tyres are losing their grip on the Surface?
(c) The steering will feel very light
183. You are overtaking a motorcyclist in strong winds? What should you do?
(b) Allow extra room
184. You think the driver in front has forgotten to cancel their right Indicator. What should you do?
(c) Stay behind and not overtake
185. What should the driver of a vehicle do, when approaching a crossing?
(c) Slow down and get ready to stop
186. A driver pulls out of a side road in front of you. You have to brake hard, you should...
(c) Ignore the error and stay calm
187. An elderly person's driving ability could be affected because they may be unable to.....
(d) React very quickly
188. You are planning a long journey. Do you need to plan rest stops?
(a) YES, regular stops help Concentration

"Where Safety Comes First"

MUSS PASS DRIVING SCHOOL


189. A driver does something that upsets you. What should you do?
(b) Try not to react
190. You are approaching crossroads. The traffic lights have failed. What should you do?
(a) Be prepared to stop for any Traffic
191. What does the solid white line at the side of the road indicate
(a) Edge of the carriageway
192. You are approaching a red traffic light. What will the signal show next?
(d) Green alone
193. When following a large vehicle, you should keep well back because this.....
(d) Allows the driver to see you in the mirror
194. What does the term "Blind Spot" mean for a driver?
(a) An area **NOT** covered by your mirrors
195. Objects hanging from your interior mirror may.....
(d) Distract your attention
196. On a long motorway journey, boredom can cause you to feel sleepy. What should you do in a case like that?
(a) Leave the motorway and find a safe place to stop
(b) Ensure a supply of fresh air into you vehicle
197. You should **ONLY** use a mobile phone when.....
(c) Suitably parked
198. You are waiting to emerge from a junction. The windscreen pillar is restricting your view. What should you be very particularly aware of?
(b) Motorcyclists

"Where Safety Comes First"

MUSS PASS DRIVING SCHOOL

199. **When emerging from junctions, which is most likely to obstruct your view?**
(b) Windscreen pillars
200. **When you see a hazard ahead, you should use the mirrors. Why is this?**
(d) To assess how your actions will affect following traffic
201. **You are waiting to turn right at the end of a road. Your view is obstructed by parked vehicles. What should you do?**
(d) Stop and then move forward slowly and carefully for a proper view
202. **You are on a motorway. You see an incident on the other side of the road. Your lane is clear. What should you do?**
(b) Concentrate on what is happening ahead
203. **The conditions are good and dry. You could use the "two-second" rule.....**
(c) To keep a safe gap from the vehicle in front
204. **Following a large vehicle too closely is unwise because.....**
(b) Your view ahead is reduced
205. **What is the nearest you may park at a junction?**
(a) 39 feet
206. **You are taking medicines that are likely to affect your driving. What should you do?**
(d) Seek medical advice before driving
207. **What actions should you take, when you see flashing amber lights near a school?**
(d) Reduce speed until you are clear of the area
208. **When you are overtaking a cyclist, you are to leave as much space as you would give to a car. What is the main reason for this?**
(b) The cyclist might swerve

MUSS PASS DRIVING SCHOOL

209. You arrive at the scene of an accident, there has been an engine fire and someone's hands and arms have been burnt. What must you NOT do?
(a) Remove anything sticking to the Burn
210. What is the shortest stopping distance at 30 mph?
(b) 75 feet
211. You are travelling on a long downhill slope. What should you do to help control the speed of your vehicle?
(c) Select a lower gear
212. Why is 'Coasting' wrong?
(a) It will cause the car to skid
213. Which of the following should you do before stopping?
(c) Use your mirrors
214. Identify the sign which means "Sudden Aircraft" 
215. What is the meaning of a continuous SOLID WHITE LINE in the middle of the road?
(b) NO overtaking
216. What is the meaning of a long white line with short gaps?
(b) Hazard warning line
217. On which of the following is it illegal to have red light showing?
(c) On the front of your car
218. After overtaking a vehicle on the right. What should you do before moving back?
(c) Check your left door mirror
219. What additional precautions should you take if you must park on a hill facing downwards in a manual car?
(b) Lock the steering wheel towards the gutter and select reverse gear
220. According to the Highway Code, what should be kept clean on your vehicle?
(b) Lights, reflectors glass, windscreen, mirrors and number plates

"Where Safety Comes First"

MUSS PASS DRIVING SCHOOL

221. You are not sure if your cough medicine will affect you. What two things should you do?
(c) Ask your doctor
(d) Check the medicine label
222. As a driver find that your eyesight has become very poor. Your optician says they cannot help you. The law says that you should tell.....
(d) The licensing authority
223. You are driving on a motorway. The traffic ahead is braking sharply because of an incident. How could you warn traffic behind you?
(c) Briefly use the hazard warning lights
224. You see two elderly pedestrians about to cross the road ahead. You should.....
(b) Be careful, they may misjudge your speed
225. You are coming up to a roundabout. A cyclist is signaling to turn right. What should you do?
(c) Give the cyclist plenty of room
226. You are waiting to come out of a side road. Why should you watch carefully for motorcycles?
(b) Motorcycles are small and hard to see
227. There is slow-moving motorcycles ahead of you. You are unsure what the rider is going to do. You should.....
(d) Stay behind
228. You see a pedestrian with a dog. The dog has a yellow or burgundy coat. This especially warns you that the pedestrian is.....
(c) Deaf
229. You are approaching two cyclist. They approach a roundabout in the left-hand lane. In which direction should you expect the cyclists to go?
(d) Any direction
230. You see a horse and rider as you approach a roundabout. They are signaling right but keeping well to the left. you should.....
(c) Stay well back

"Where Safety Comes First"

MUSS PASS DRIVING SCHOOL

231. You are reversing around a corner when you notice a pedestrian walking behind you. What should you do?
(b) Stop and give way
232. You want to turn right from a junction but your view is restricted by parked vehicles. What should you do?
(d) Stop, then move slowly forward until you have a clear view
233. You are driving on a motorway. The car ahead shows its hazard for a short time. This tells you that.....
(d) Traffic ahead is slowing or stopping suddenly
234. Which three pieces of information are found on a vehicle registration document?
(a) Make of vehicle
(c) Registered keeper
(e) Engine Size
235. You arrive at the scene of an accident. A motorcyclist is unconscious. Your priority is the casualty's.....
(b) Breathing
236. Which of the following should you not do at the scene of a collision?
(d) Offer someone a cigarette to calm them down
237. A casualty has an injured arm. They can move it freely, but it is bleeding. Why should you get them to keep it in a raised position?
(c) It will help them to reduce the blood flow
238. Which two things should you do when a front tyre bursts?
(b) Let the vehicle roll to a stop
(d) Hold the steering wheel lightly
239. Your vehicle catches fire while driving through a tunnel. It is still drivable. What should you do?
(c) Drive it out of the tunnel if you can do so
240. You suspect that an injured person may be suffering from shock. What are the warning signs to look for?
(c) Sweating

"Where Safety Comes First"

MUSS PASS DRIVING SCHOOL

241. Are passengers allowed to ride in a caravan that is being towed?
(c) No, not at any time
242. Overloading your vehicle can seriously affect the.....
(e) Handling
243. On which two occasions might you inflate your tyres to more than the recommended normal pressure?
(a) When driving fast for a long distance
(f) When carrying a heavy load
244. Who is responsible for making sure that the vehicle is not overloaded?
(b) The driver of the vehicle
245. When are you allowed to use hazard warning lights?
(c) When stopped and temporarily obstructing traffic
246. You have been driving in thick fog which has now cleared. You must switch off your rear fog lights because.....
(d) They make your brake lights less clear
247. Driving a vehicle with anti-lock brakes allows you to:
(d) Steer and brake at the same time
248. The term "Thinking Distance" refers to:
(c) The distance travelled from the moment a hazard is seen to the time the brakes are applied
249. You are being overtaken and you see oncoming traffic close ahead, you should.....
(c) Reduce the speed so that the overtaking vehicle may move in ahead of you
- "Where Safety Comes First"

MUSS PASS DRIVING SCHOOL

250. A pedestrian is hit by a car, which is travelling at 20 mph. The pedestrian.....
(d) Will probably survive
251. When passing stationary vehicles, you should, if possible allow.....
(b) At least the width of a car door
252. After a long dry spell, the road is likely to be most slippery:
(c) Five minutes after it starts raining
253. When driving a car with automatic transmission, what should one do when approaching a steep downhill gradient?
(c) Reduce speed and use the selector to hold down the gear
254. While driving along an open road, you notice that the temperature gauge of your vehicle is recording a rapid rise in temperature, the most likely cause of this is:
(a) The fan belt is broken
255. When driving a vehicle fitted with automatic transmission, what should one do when negotiating a corner?
(b) Slow down before the corner and accelerate gently as you turn
256. There are two ways that signals are normally given, the first is by direction indicators; what is the second?
(b) Brake lights
257. What should you especially be sure of, before driving somebody else's vehicle?
(a) The vehicle is insured for your use
258. You arrive at the scene of an accident, a pedestrian is bleeding badly from an arm wound. What should you do?
(b) Apply pressure over the wound and raise the arm

"Where Safety Comes First"

MUSS PASS DRIVING SCHOOL

259. Which vehicle might have to use a different course to normal at a roundabout?
(d) Long Vehicles
260. You take the wrong road and find that you are on a one-way street. What should you do?
(d) Continue to the end of the road
261. Why should you check your shoulder before turning right into a side road?
(d) To check for overtaking vehicles
262. What should you do at the scene of an accident?
(b) Not put yourself at risk
263. What is the purpose of "Child Locks" in a vehicle?
(d) To stop children from opening rear doors
264. Where in particular should you look out for motorbikes?
(c) At a road junction
265. Why are mirrors often slightly curved (convex)?
(c) They give a wider field of vision
266. There is a police car following you. The police officer flashes the headlights and points to the left. What should you do?
(b) Pull up on the left
267. You are approaching a controlled crossing where the amber light is on. What should you do?
(a) Give way to pedestrians who are crossing

"Where Safety Comes First"

MUSS PASS DRIVING SCHOOL

268. You are travelling behind a bike, but you want to turn left just ahead. What should you do?
(b) Stay behind until the bike has passed the Junction
269. If you are taking drugs that are likely to affect your driving, what should you do?
(c) Do not drive
270. Why is it important to wear suitable shoes while driving?
(c) To maintain control of the pedals
271. You are driving into a build up area. What should you do if you approach a speed bump in the road?
(a) Slow your vehicle down
272. Why should you ensure that you have cancelled your indicators after turning?
(c) To avoid misleading the other road users
273. What is the effect of 'Coasting' on a vehicle?
(d) It reduces the driver control
274. What should you do to move off safely from a parked position?
(c) Use your mirrors and look around for a final check
275. You are driving past parked cars. You notice a bicycle wheel sticking out between them. What should you do?
(b) Slow down and be prepared to stop for cyclist
276. Why is it more difficult to overtake a large vehicle than a car?
(d) It takes longer to pass one
277. Which two of the following are correct? When overtaking at night you should.....
(b) Be careful because you can see less
(e) Beware of bends in the road ahead
278. Why should you always reduce your speed travelling in a fog?
(b) It is more difficult to see events ahead

"When Safety Comes First"

MUSS PASS DRIVING SCHOOL

279. Hills can affect the performance of your Vehicle. Which two apply when driving up a steep hill?

- (a) You will slow down sooner
- (c) The engine will work harder

285. The road is wet. Why might a motorcyclist steer round drain covers on a bend?

- (c) To prevent the motor cycle from sliding on the metal drain covers

280. Why is travelling in neutral for long distance (known as coasting) wrong?

- (d) There is no engine braking

281. Whilst driving, the fog clears and you can see more clearly. You must remember to.....

- (c) Switch off the demister

282. How can you use the engine of your Vehicle to control your speed?

- (c) By changing to a lower gear

283. You are on a motorway at night, with other vehicles just ahead of you. Which lights should you have on?

- (a) Dipped headlights

284. Which three of the follow will affect your stopping distance?

- (a) How fast you are going
- (c) The tyres on your vehicle
- (d) The weather

"Safety Comes First"